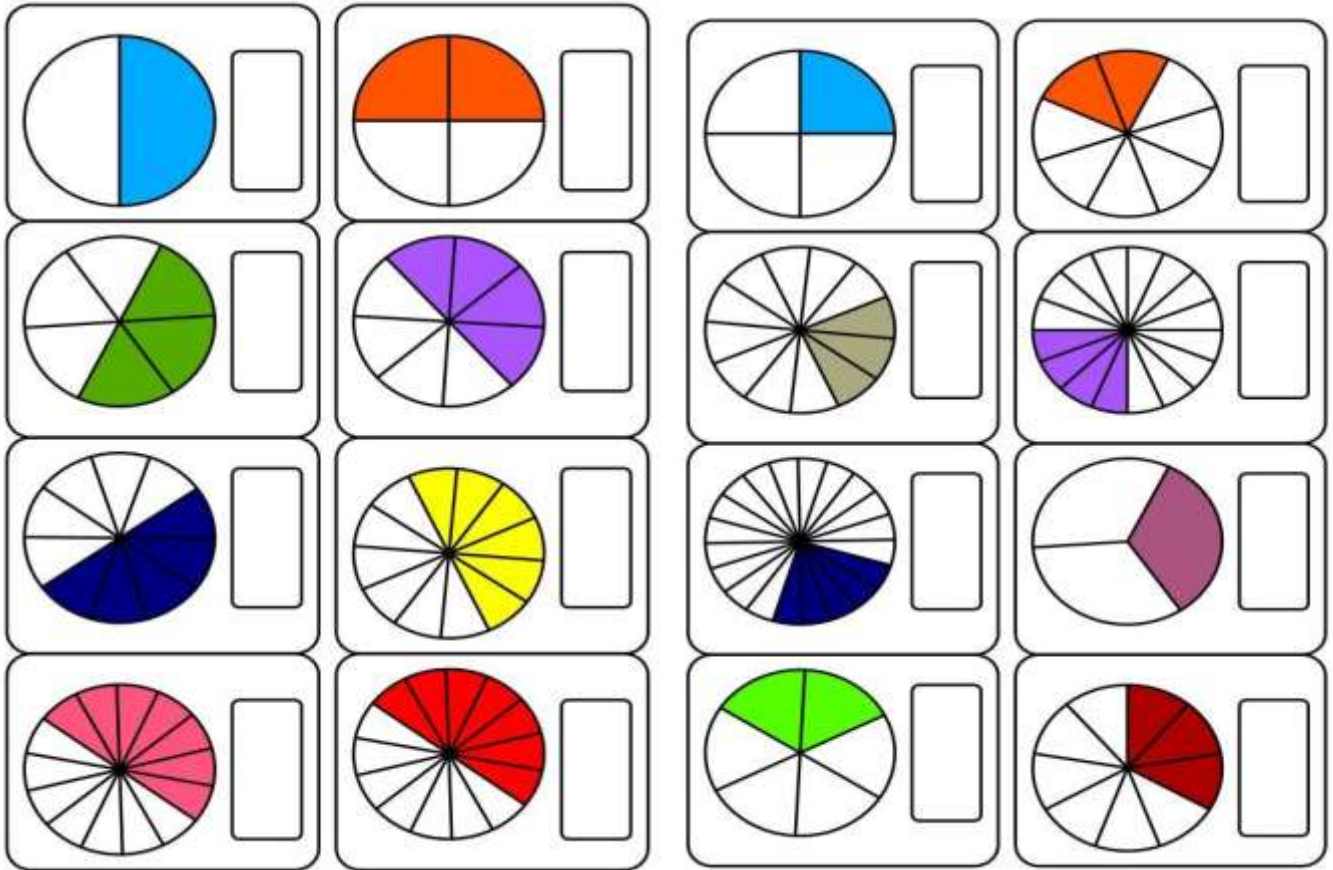


Zapiš zlomkem jaká část obrazce je vybarvena

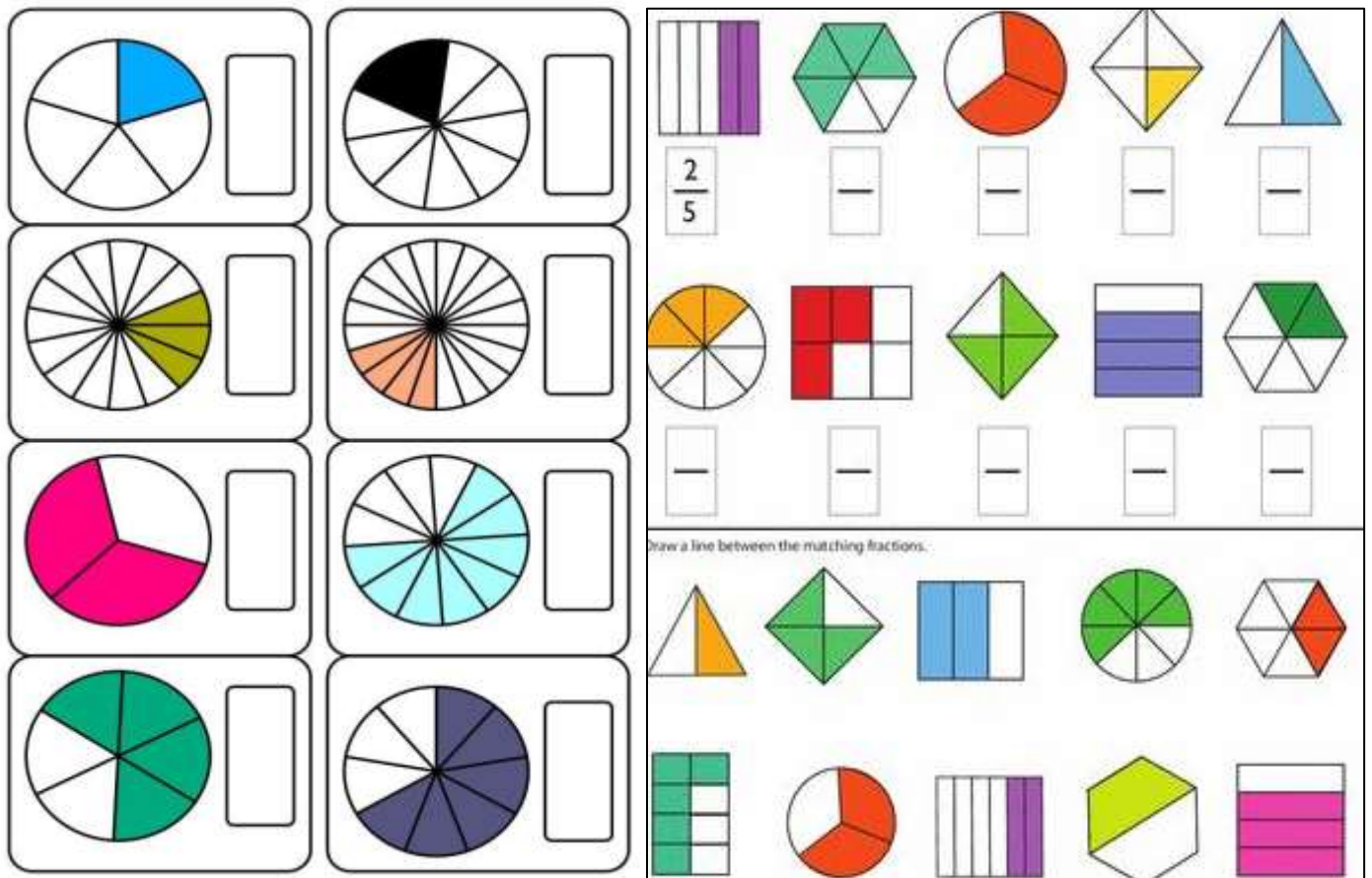
1.

2.

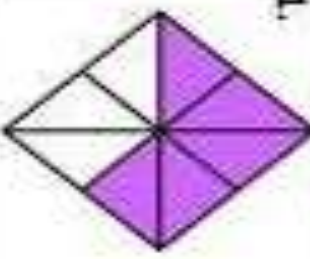
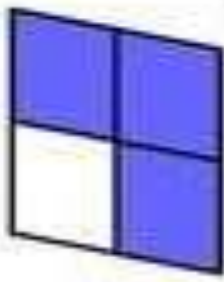
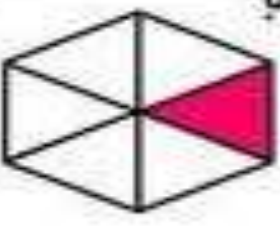
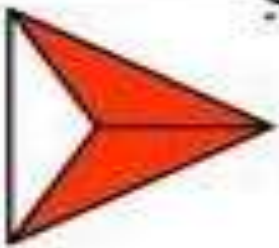
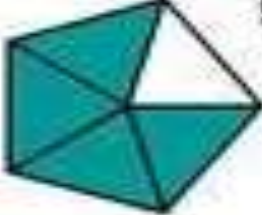
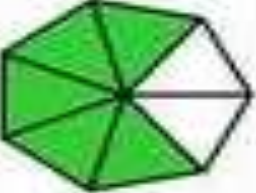
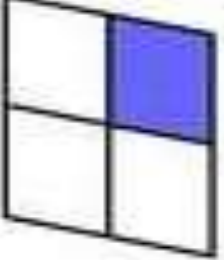

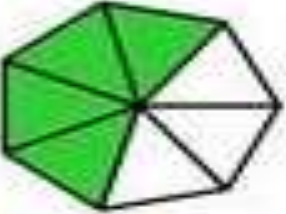
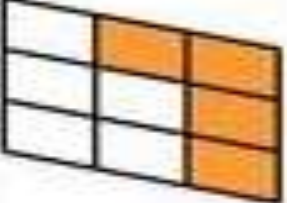




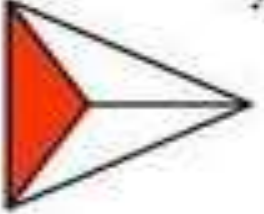



3.

4.



Zlomky doplň zlomkem jaká část celku je vybarvená:

<p>1.</p>  <p>5</p> <p><input type="text"/></p>	<p>3.</p>  <p>4</p> <p><input type="text"/></p>	<p>5.</p>  <p>1</p> <p><input type="text"/></p>	<p>7.</p>  <p>2</p> <p><input type="text"/></p>
<p>2.</p>  <p>5</p> <p><input type="text"/></p>	<p>4.</p>  <p>5</p> <p><input type="text"/></p>	<p>6.</p>  <p>1</p> <p><input type="text"/></p>	<p>8.</p>  <p>5</p> <p><input type="text"/></p>
<p>9.</p>  <p>4</p> <p><input type="text"/></p>	<p>11.</p>  <p>9</p> <p><input type="text"/></p>	<p>13.</p>  <p>1</p> <p><input type="text"/></p>	<p>15.</p>  <p>8</p> <p><input type="text"/></p>
<p>10.</p>  <p>2</p> <p><input type="text"/></p>	<p>12.</p>  <p>3</p> <p><input type="text"/></p>	<p>14.</p>  <p>1</p> <p><input type="text"/></p>	<p>16.</p>  <p>6</p> <p><input type="text"/></p>